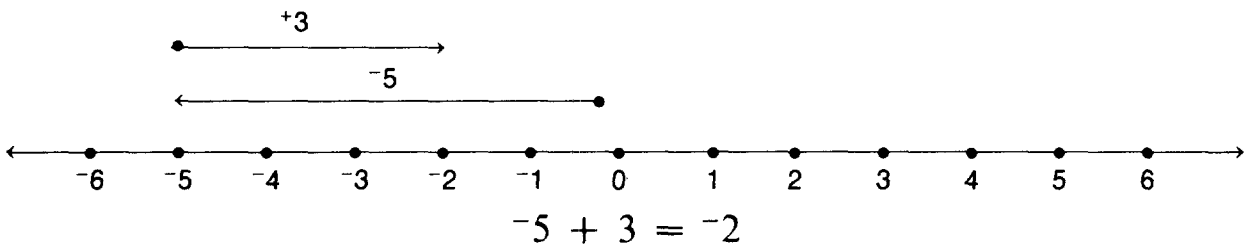
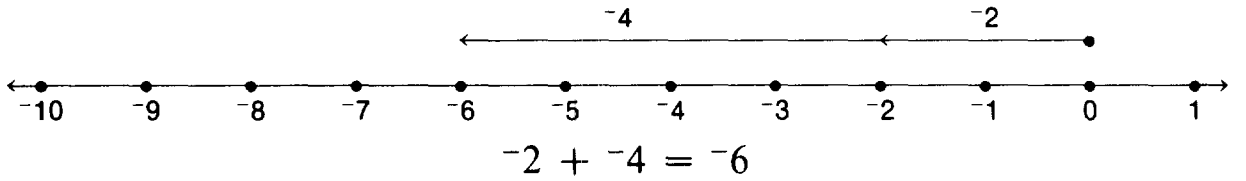
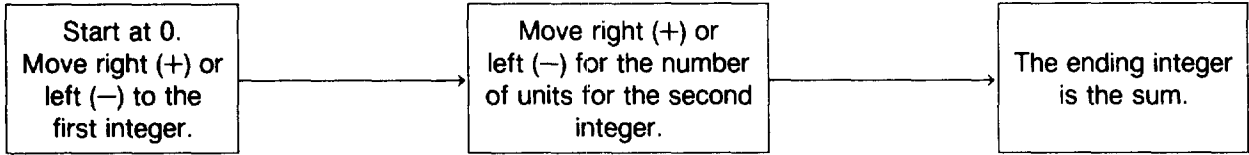


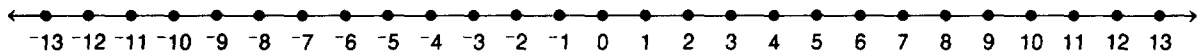
Another Look

For use with Lesson 2-3.

Addition of Integers



Find the sums. Use the number line if necessary.



Start at 0.
Move left 3.
Move right 2.

Start at 0. Move
left 5, then left
4 more.

Start at 0. Move
right 5, left 3,
then left 4 more.

- | | | |
|------------------------|------------------------|--------------------------|
| 1. $-3 + 2 =$ _____ | 2. $-5 + -4 =$ _____ | 3. $5 + -3 + -4 =$ _____ |
| 4. $-8 + 13 =$ _____ | 5. $7 + -4 =$ _____ | 6. $-4 + 8 =$ _____ |
| 7. $11 + -6 =$ _____ | 8. $6 + -8 =$ _____ | 9. $-7 + 14 =$ _____ |
| 10. $10 + -1 =$ _____ | 11. $-5 + -9 =$ _____ | 12. $12 + -9 =$ _____ |
| 13. $8 + -7 =$ _____ | 14. $-8 + 5 =$ _____ | 15. $0 + -10 =$ _____ |
| 16. $-6 + -6 =$ _____ | 17. $-1 + -11 =$ _____ | 18. $9 + -16 =$ _____ |
| 19. $10 + -20 =$ _____ | 20. $-17 + 17 =$ _____ | 21. $-7 + 12 =$ _____ |