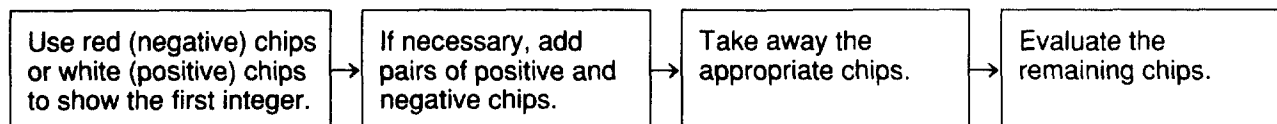


Another Look

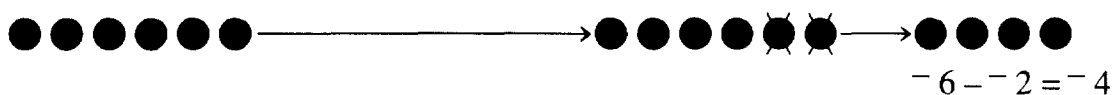
For use with Lesson 2-4.

Subtracting Integers

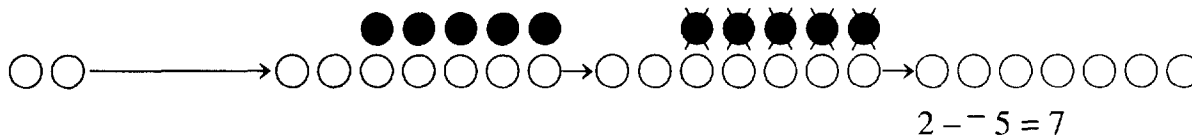
To subtract integers using counting chips:



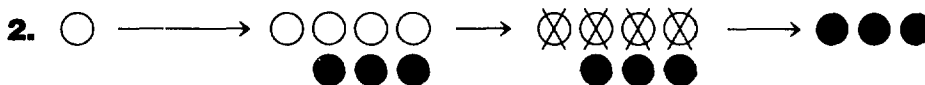
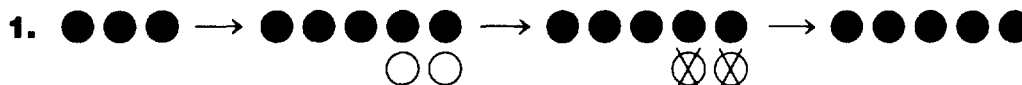
Subtract: $-6 - -2$



Subtract: $2 - -5$



Write a subtraction equation for each model.



Subtract. Use counting chips if necessary.

- | | | |
|----------------------|-----------------------|-----------------------|
| 3. $-6 - 9 =$ _____ | 4. $6 - 9 =$ _____ | 5. $-5 - 7 =$ _____ |
| 6. $5 - 8 =$ _____ | 7. $-4 - 6 =$ _____ | 8. $4 - 6 =$ _____ |
| 9. $-3 - 9 =$ _____ | 10. $3 - 9 =$ _____ | 11. $-9 - 3 =$ _____ |
| 12. $9 - -3 =$ _____ | 13. $-3 - -9 =$ _____ | 14. $-9 - -3 =$ _____ |
| 15. $-4 - 8 =$ _____ | 16. $4 - -8 =$ _____ | 17. $-9 - 2 =$ _____ |